



www.parotuition.com

Paro Tuition, 62 Windmill Street,  
Gravesend, Kent, DA12 1BJ

For more free resources visit  
[www.parotuition.com/free-resources-advice](http://www.parotuition.com/free-resources-advice)



# VERTICAL CODES

Each of the shapes on the left have letters attached to them which are code for the shape or shapes.  
Work out the code and solve for the shape or shapes on the right.

## NON-VERBAL REASONING

**Suitable for:** Kent Test/GL Assessment Tests

**Difficulty:** Medium

**Timing:** 6-7 minutes

Follow us on social media for free content and updates



facebook.com/parotuition








Paro Tuition











@parotuition

Each of the shapes on the left have letters attached to them which are code for the shape or shapes. Work out the code and solve for the shape or shapes on the right.






1

	LN			LO	KO	JO	KP	LP
	KO		?	A	B	C	D	E
	JP							
	LP							





2

	AD			CD	AF	BF	BD	CF
	BE			A	B	C	D	E
	CE			?				
	AF							

3

	CS			CT	CU	DS	DV	CV
	DT		?	A	B	C	D	E
	DU							
	DS							

4

-  MQ
-  NR
-  OS
-  NQ



MR  
A





MS  
B

NQ  
C

NS  
D

OR  
E

5

-  CF
-  DG
-  CH
-  EF



CG  
A

CF  
B





DH  
C

DF  
D

EH  
E

T U I T I O N

6

-  AF
-  BF
-  CG
-  DH



AG  
A

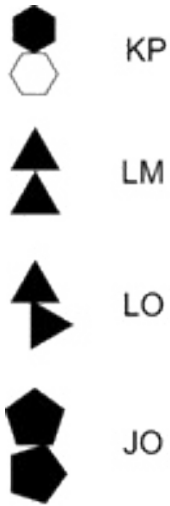
AH  
B

BH  
C

CF  
D

DG  
E

7



KM  
A

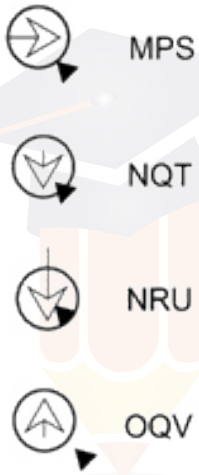
KO  
B

LP  
C

JP  
D

JM  
E

8



MQU  
A

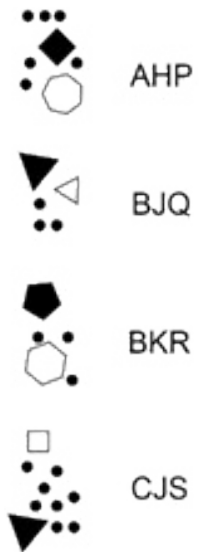
MRT  
B

NPV  
C

NQS  
D

OQU  
E

9



AJR  
A

AKS  
B

BJP  
C

BHR  
D

CKQ  
E

10



AHP



BJQ



BKR



CJS



?

AJR

A

AKS

B

BJP

C

BHR

D

CKQ

E



PARO  
TUITION